





Mental Math
worksheets
For Grade 1

Mental Math Worksheets

1	5 + 3	
2	Write down the next number: 12, 13, 14, 15, _____	
3	Write One Hundred Sixty One in numbers.	
4	Which of the number is not a multiple of 2? 8 16 17 18 20	
5	Measure this line in inches. 	
6	Draw the next shape in the sequence. 	
7	Which number comes after 28?	
8	5 - 2	
9	How many heart are there? 	
10	What is $\frac{1}{2}$ of 20?	

Mental Math Worksheets

11	2×5	
12	Which of the number is not a multiple of 3? 6 9 12 14 30	
13	Write Five Hundred Fifty Six in numbers.	
14	Write down the next number: 2, 3, 4, 5, _____	
15	How many sides a square has? 	
16	What is $\frac{1}{2}$ of 50?	
17	Which number comes before 20?	
18	$7 + 5$	
19	$10 - 4$	
20	10×0	