

Place Value - Worksheet

Read the numbers and look at the underlined digit. Name the place.

Write **H** for hundreds, **T** for tens and **O** for ones.

264

283

425

282

323

684

749

965

473

843

758

847

Place Value - Worksheet

Read the numbers and look at the underlined digit. Name the place.

Write **H** for hundreds, **T** for tens and **O** for ones.

845

832

764

635

723

834

368

284

726

853

357

256

Place Value - Worksheet

Read the numbers and look at the underlined digit. Name the place.

Write **H** for hundreds, **T** for tens and **O** for ones.

568

286

589

293

965

832

738

270

471

Place Value - Worksheet

Read the numbers and look at the underlined digit. Name the place.

Write **H** for hundreds, **T** for tens and **O** for ones.

721

578

642

853

321

546

534

262

476

Place Value - Worksheet

Read the numbers and look at the underlined digit. Name the place.

Write **H** for hundreds, **T** for tens and **O** for ones.

738

456

770

144

470

579

102

971

910

Place Value - Worksheet

Read the numbers and look at the underlined digit. Name the place.

Write **H** for hundreds, **T** for tens and **O** for ones.

875

238

457

427

472

219

681

283

817

Place Value - Worksheet

Read the numbers and look at the underlined digit. Name the place.

Write **H** for hundreds, **T** for tens and **O** for ones.

854

338

675

346

926

434

845

938

711

Place Value - Worksheet

Read the numbers and look at the underlined digit. Name the place.

Write **H** for hundreds, **T** for tens and **O** for ones.

875

238

457

427

472

219

681

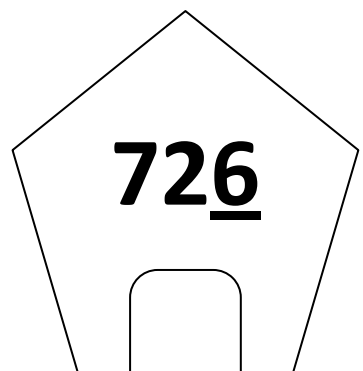
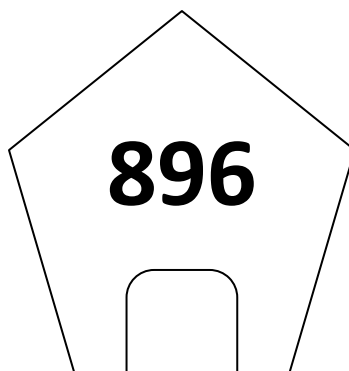
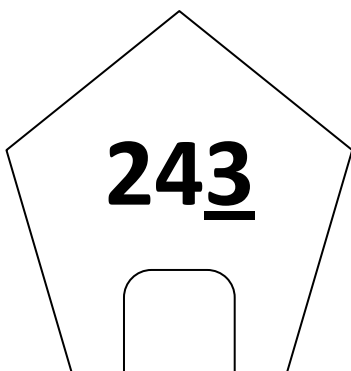
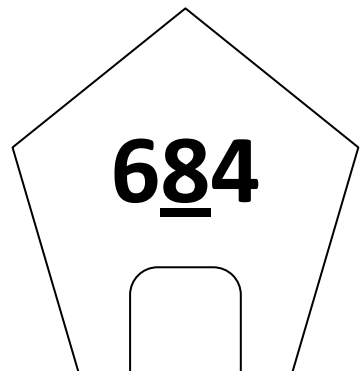
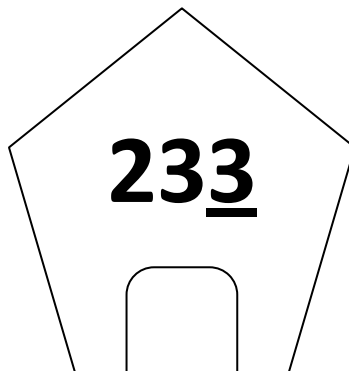
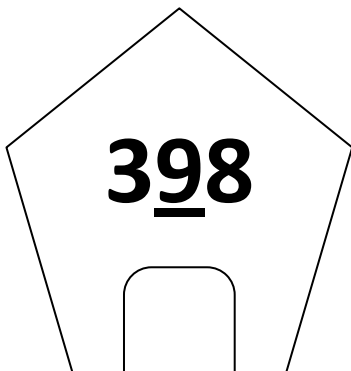
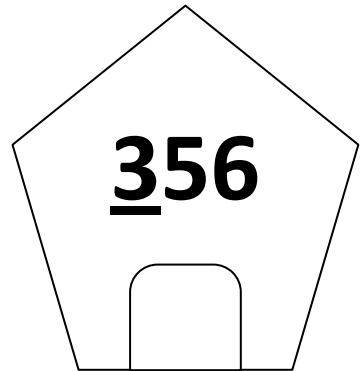
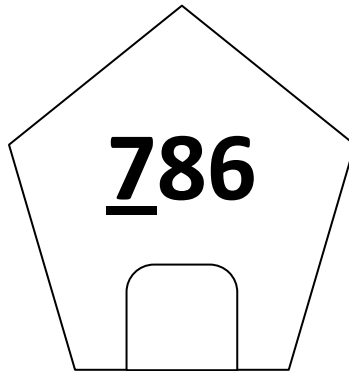
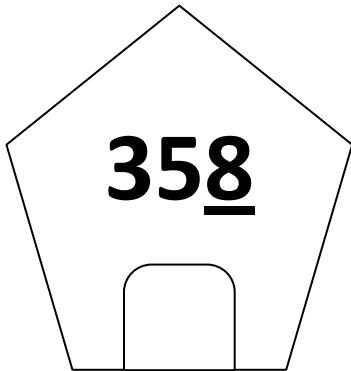
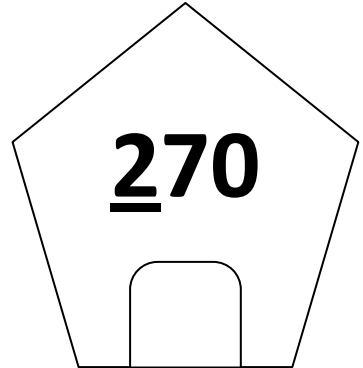
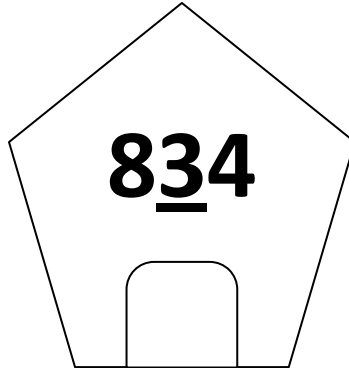
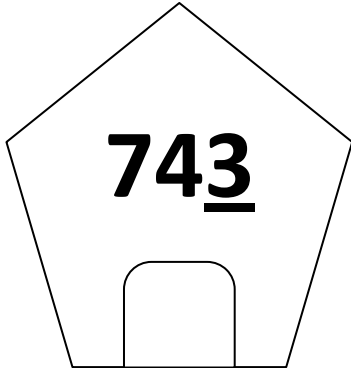
283

817

Place Value - Worksheet

Read the numbers and look at the underlined digit. Name the place.

Write **H** for hundreds, **T** for tens and **O** for ones.



Place Value - Worksheet

Read the numbers and look at the underlined digit. Name the place.

Write **H** for hundreds, **T** for tens and **O** for ones.

