
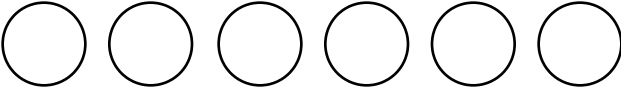


Name _____

Mental Math Worksheets

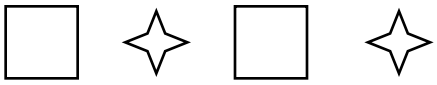

Answer the following

1 What is $61 + 62$?	
2 Write the next number $181, 182, 183, \underline{\hspace{2cm}}$	
3 Write Four Hundred and Eight in numbers	
4 Which number is a multiple of 2 ? $9 \quad 8 \quad 7 \quad 5$	
5 Draw the next shape in the sequence. 	
6 Which number comes after 98 ?	
7 What is $39 - 20$?	
8 How many Circles are there ? 	
9 What number is one half of 78 ?	
10 What is 9×8 ?	

Name _____

Mental Math Worksheets


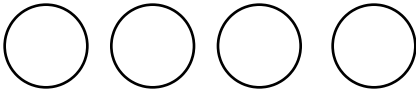
Answer the following

1 What is $55 + 56$?	
2 Write the next number $172, 173, 174, \underline{\quad}$	
3 Write Four Hundred and Five in numbers	
4 Which number is a multiple of 2 ? 1 11 2 21	
5 Draw the next shape in the sequence. 	
6 Which number comes after 95 ?	
7 What is $46 - 20$?	
8 How many Circles are there ? 	
9 What number is one half of 72 ?	
10 What is 6×8 ?	

Name _____

Mental Math Worksheets



Answer the following

1 What is $57 + 58$?	
2 Write the next number $175, 176, 177, \underline{\quad}$	
3 Write Four Hundred and Six in numbers	
4 Which number is a multiple of 2 ? $20 \quad 41 \quad 31 \quad 51$	
5 Draw the next shape in the sequence. 	
6 Which number comes after 96 ?	
7 What is $47 - 32$?	
8 How many Circles are there ? 	
9 What number is one half of 74 ?	
10 What is 7×8 ?	

Name _____

Mental Math Worksheets

Answer the following

1 What is $59 + 60$?	
2 Write the next number 178, 179, 180, _____	
3 Write Four Hundred and Seven in numbers	
4 Which number is a multiple of 2 ? 77 88 11 3	
5 Draw the next shape in the sequence. 	
6 Which number comes after 97 ?	
7 What is $48 - 15$?	
8 How many Circles are there ? 	
9 What number is one half of 76 ?	
10 What is 8×8 ?	