





Mental Math
worksheets
For Grade 1

Mental Math Worksheets

1	What is $9 + 1$?	
2	Write the next number 5,6,7,8,_____	
3	Write One Hundred and Ten in numbers.	
4	Which number is not a multiple of 4 ? 8 16 17 20 28	
5	Draw the next shape in the sequence. 	
6	Which number comes after 9 ?	
7	What is $10 - 3$?	
8	How many Triangles are there? 	
9	What number is one half of 10 ?	
10	What is $11 + 4$?	

Mental Math Worksheets

1	What is 3 x 4 ?	
2	Which number is not a multiple of 3 ? 6 9 12 7 30	
3	Write Fifty One in numbers.	
4	Which number is not a multiple of 2 ? 1 18 22 28 42	
5	How many sides a Triangle has? 	
6	Which number comes after 23 ?	
7	What number is one half of 6 ?	
8	How many Stars are there? 	
9	What is 10 x 2 ?	
10	What is 15 - 10 ?	