




**Mental Math**  
**worksheets**  
**For Grade 1**

# Mental Math Worksheets

1	<b>5 + 3</b>	
2	<b>Write down the next number: 12, 13, 14, 15, _____</b>	
3	<b>Write One Hundred Sixty One in numbers.</b>	
4	<b>Which of the number is not a multiple of 2? 8 16 17 18 20</b>	
5	<b>How a student can do it? "Measure this line in inches. " _____</b>	
6	<b>Draw the next shape in the sequence.</b> 	
7	<b>Which number comes after 28?</b>	
8	<b>5 - 2</b>	
9	<b>How many heart are there?</b> 	
10	<b>What is <math>\frac{1}{2}</math> of 20?</b>	

# Mental Math Worksheets

11	$2 \times 5$	
12	Which of the number is not a multiple of 3? 6 9 12 14 30	
13	Write Five Hundred Fifty Six in numbers.	
14	Write down the next number: 2, 3, 4, 5, _____	
15	How many sides a square has? 	
16	What is $\frac{1}{2}$ of 50?	
17	Which number comes before 20?	
18	$7 + 5$	
19	$10 - 4$	
20	$10 \times 0$	