





Mental Math
worksheets
For Grade 1

Mental Math Worksheets

1	What is $8 + 1$?	
2	Write the next number 1, 2, 3, 4, 5, 6, _____	
3	Write One Hundred and Twenty in numbers.	
4	Which number is a multiple of 2 ? 17 7 9 4 23	
5	Draw the next shape in the sequence. 	
6	Which number comes after 5 ?	
7	What is $10 - 4$?	
8	How many Circles are there? 	
9	What number is one half of 8 ?	
10	What is $10 + 4$?	

Mental Math Worksheets

1	What is 4×2 ?	
2	Which number is a multiple of 5 ? 25 9 12 7 31	
3	Write Sixty Two in numbers.	
4	Which number is not a multiple of 3 ? 27 19 22 21 30	
5	How many sides a Square has? 	
6	Which number comes after 24 ?	
7	What number is one half of 6 ?	
8	How many Triangles are there? 	
9	What is 10×3 ?	
10	What is $15 - 9$?	