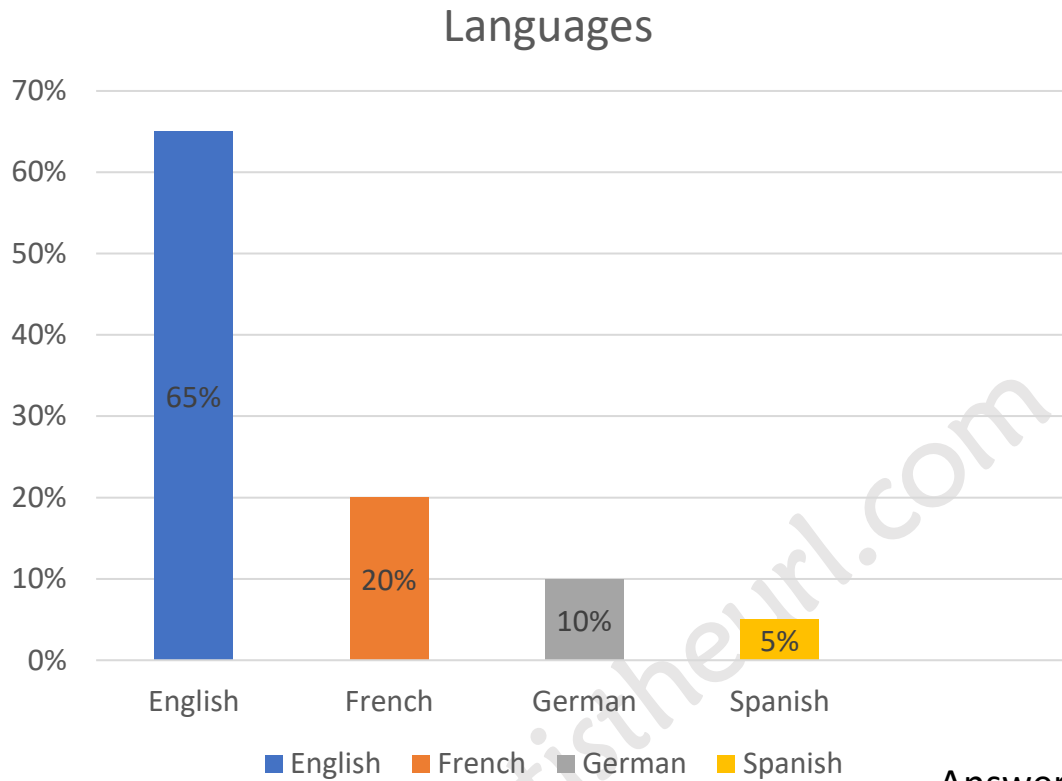


**Reading Graphs**  
**Worksheets**  
**for Grade 6**

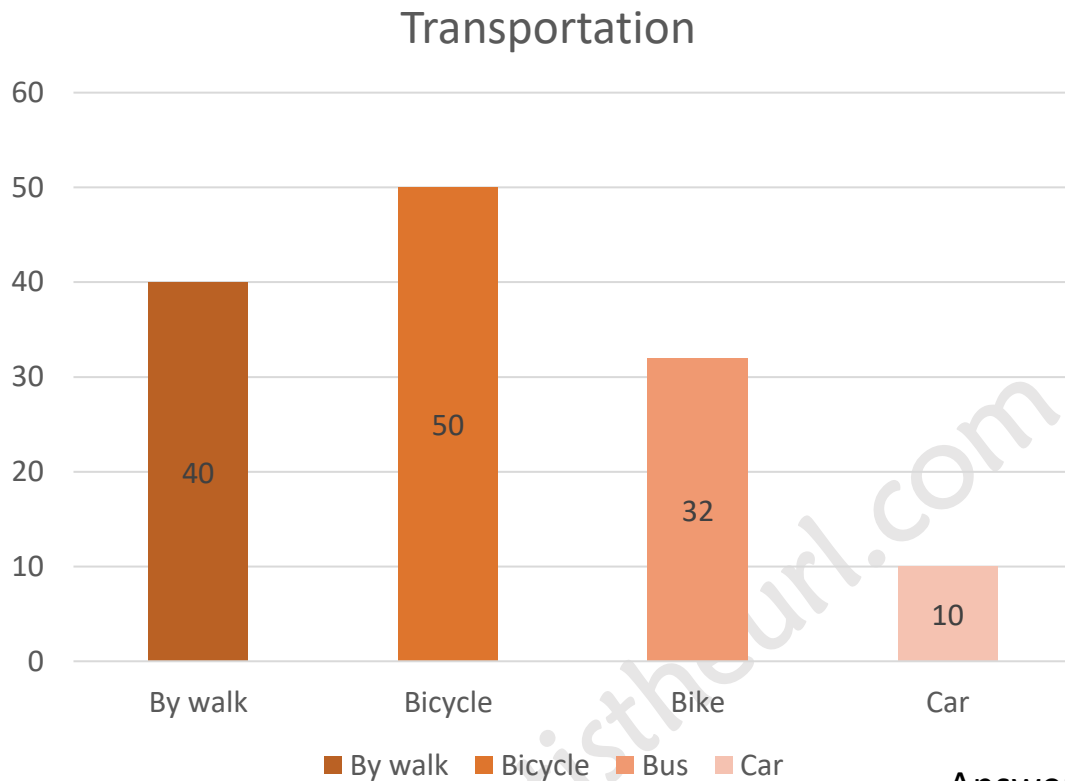
**Q.** The graph shows the number (in percentage) of people speaking English, French, German, and Spanish. Look at the chart carefully and answer the questions.



### Answers

- 1) What is the most spoken language? \_\_\_\_\_
- 2) How many people speak French? \_\_\_\_\_
- 3) How many people speak English? \_\_\_\_\_
- 4) How many people speak Spanish? \_\_\_\_\_
- 5) How many people speak German? \_\_\_\_\_
- 6) What is the second most spoken language? \_\_\_\_\_
- 7) What is the least spoken language? \_\_\_\_\_

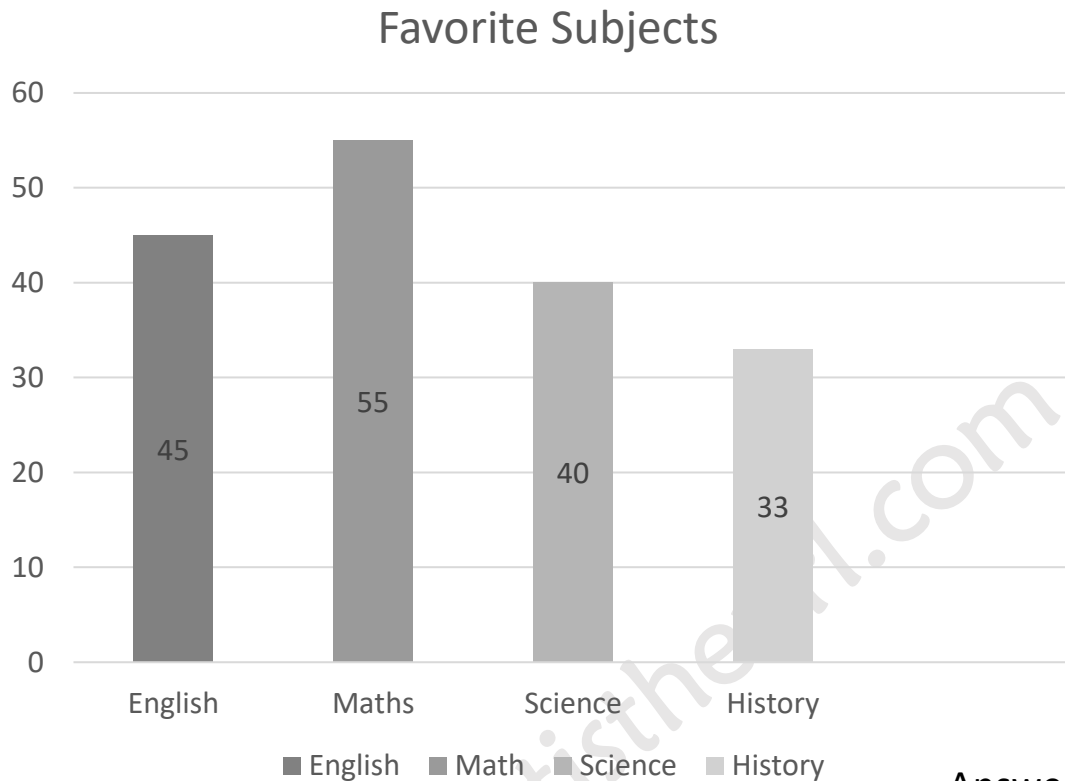
Q. The graph shows the number of students come to school by bicycle, bus, car and by walk. Look at the chart carefully and answer the questions.



**Answers**

- 1) How many students come to school by bicycle? \_\_\_\_\_
- 2) How many students come to school by car? \_\_\_\_\_
- 3) What is the least used transportation? \_\_\_\_\_
- 4) How many students come to school by walk? \_\_\_\_\_
- 5) How many students come to school by bus? \_\_\_\_\_
- 6) What is the most used transportation? \_\_\_\_\_
- 7) How many students are there in the school? \_\_\_\_\_

Q. The graph shows the number of students like the subjects English, Mathematics, Science and History. Look at the chart carefully and answer the questions.



### Answers

1) What is the most favorite subject?

\_\_\_\_\_

2) How many students like Science?

\_\_\_\_\_

3) How many students like English?

\_\_\_\_\_

4) How many students like Math?

\_\_\_\_\_

5) How many students like History?

\_\_\_\_\_

6) What is the second favorite subject?

\_\_\_\_\_

7) What is the least favorite subject?

\_\_\_\_\_