





Mental Math
worksheets
For Grade 1

Mental Math Worksheets

1	What is $7 + 2$?	
2	Write the missing number 1, 2, ____, 4, 5, 6	
3	Write Fifty One in numbers.	
4	Which number is a multiple of 2 ? 17 7 9 18 23	
5	Draw the next shape in the sequence. 	
6	Which number comes after 9 ?	
7	What is $7 - 1$?	
8	How many Circles are there? 	
9	What number is one half of 10 ?	
10	What is $10 + 3$?	

Mental Math Worksheets

1	What is 4×3 ?	
2	Which number is a multiple of 5 ? 26 10 12 7 31	
3	Write Sixty Three in numbers.	
4	Which number is not a multiple of 3 ? 3 12 36 39 5	
5	How many sides a pentagon has? 	
6	Which number comes after 25 ?	
7	What number is one half of 8 ?	
8	How many Triangles are there? 	
9	What is 10×4 ?	
10	What is $15 - 10$?	