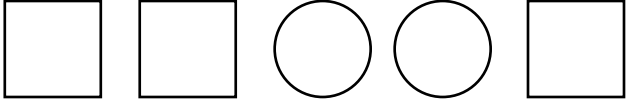

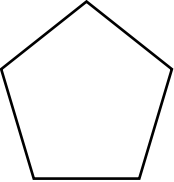


Mental Math
worksheets
For Grade 1

Mental Math Worksheets

| | | |
|----|--|--|
| 1 | 4 + 5 | |
| 2 | Write down the next number: 9, 10, 11, 12, 13, _____ | |
| 3 | Write One Hundred Eleven in numbers. | |
| 4 | Which of the number is not a multiple of 2? 7 16 12 18 20 | |
| 5 | Measure this line in inches. _____ | |
| 6 | Draw the next shape in the sequence.  | |
| 7 | Which number comes after 25? | |
| 8 | 5 - 1 | |
| 9 | How many hearts are there?  | |
| 10 | What is $\frac{1}{2}$ of 30? | |

Mental Math Worksheets

| | | |
|----|---|--|
| 11 | 3×5 | |
| 12 | Which of the number is not a multiple of 3? 6 9 15 12 30 | |
| 13 | Write Five Hundred Forty Six in numbers. | |
| 14 | Write down the next number: 5, 6, 7, 8, 9, | |
| 15 | How many sides a pentagon has?  | |
| 16 | What is $\frac{1}{2}$ of 20? | |
| 17 | Which number comes before 19? | |
| 18 | $7 + 6$ | |
| 19 | $10 - 5$ | |
| 20 | 10×1 | |