



Name _____

Mental Math Worksheets



Answer the following

<p>1 What is $11 + 22$?</p>	
<p>2 Write the next number 17, 18, 19, _____</p>	
<p>3 Write One Hundred and Four in numbers</p>	
<p>4 Which number is a multiple of 2? 33 3 13 4</p>	
<p>5 Draw the next shape in the sequence.</p> <p></p>	
<p>6 Which number comes after 49?</p>	
<p>7 What is $39 - 21$?</p>	
<p>8 How many Squares are there?</p> <p></p>	
<p>9 What number is one half of 28?</p>	
<p>10 What is 3×6?</p>	

Name _____

Mental Math Worksheets



Answer the following

<p>1 What is $25 + 15$?</p>	
<p>2 Write the next number 31, 32, 33, ____</p>	
<p>3 Write Six Hundred and One in numbers</p>	
<p>4 Which number is a multiple of 3 ? 1 10 20 30</p>	
<p>5 Draw the next shape in the sequence.</p> <p></p>	
<p>6 Which number comes after 79 ?</p>	
<p>7 What is $30 - 12$?</p>	
<p>8 How many Circles are there ?</p> <p></p>	
<p>9 What number is one half of 4 ?</p>	
<p>10 What is 3×9 ?</p>	

Name _____

Mental Math Worksheets



Answer the following

<p>1 What is $17 + 14$?</p>	
<p>2 Write the next number $33, 34, 35, \underline{\quad}$</p>	
<p>3 Write Three Hundred and One in numbers</p>	
<p>4 Which number is a multiple of 3? $15 \ 2 \ 4 \ 8$</p>	
<p>5 Draw the next shape in the sequence.</p> <p></p>	
<p>6 Which number comes after 89?</p>	
<p>7 What is $9 - 8$?</p>	
<p>8 How many Squares are there?</p> <p></p>	
<p>9 What number is one half of 4?</p>	
<p>10 What is 3×5?</p>	

Name _____

Mental Math Worksheets



Answer the following

<p>1 What is $15 + 5$?</p>	
<p>2 Write the next number 10, 11, 12, ___</p>	
<p>3 Write Six Hundred and Nine in numbers</p>	
<p>4 Which number is a multiple of 3 ? 9 10 11 13</p>	
<p>5 Draw the next shape in the sequence.</p> <p></p>	
<p>6 Which number comes after 69 ?</p>	
<p>7 What is $20 - 10$?</p>	
<p>8 How many Circles are there ?</p> <p></p>	
<p>9 What number is one half of 18 ?</p>	
<p>10 What is 3×8 ?</p>	

Name _____

Mental Math Worksheets

Answer the following

1 What is $12 + 12$?	
2 Write the next number 88, 89, 90, ____	
3 Write One Hundred and Five in numbers	
4 Which number is a multiple of 2 ? 99 100 101 103	
5 Draw the next shape in the sequence. 	
6 Which number comes after 92 ?	
7 What is $19 - 11$?	
8 How many Squares are there? 	
9 What number is one half of 18 ?	
10 What is 3×9 ?	