



Name _____

Mental Math Worksheets



Answer the following

<p>1 What is $1 + 9$?</p>	
<p>2 Write the next number 91, 92, 93, _____</p>	
<p>3 Write Two Hundred and Ninety in numbers</p>	
<p>4 Which number is a multiple of 2 ? 12 3 5 19</p>	
<p>5 Draw the next shape in the sequence. </p>	
<p>6 Which number comes after 71 ?</p>	
<p>7 What is $20 - 18$?</p>	
<p>8 How many Circles are there ? </p>	
<p>9 What number is one half of 20 ?</p>	
<p>10 What is 2×7 ?</p>	

Name _____

Mental Math Worksheets

Answer the following

1	What is $7 + 3$?	
2	Write the next number 18, 19, 20, ____	
3	Write One Hundred and thirteen in numbers	
4	Which number is a multiple of 2 ? 9 19 29 40	
5	Draw the next shape in the sequence. 	
6	Which number comes after 99 ?	
7	What is $15 - 9$?	
8	How many Squares are there ? 	
9	What number is one half of 12 ?	
10	What is 3×1 ?	