
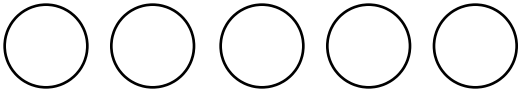


Name \_\_\_\_\_

# Mental Math Worksheets

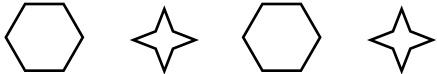
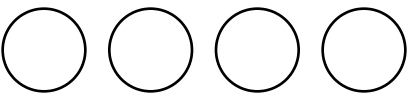
Answer the following

<b>1</b> What is $61 + 62$ ?	
<b>2</b> Write the next number 196, 197, 198, _____	
<b>3</b> Write Five Hundred and Three in numbers	
<b>4</b> Which number is a multiple of 3 ? 31 15 10 19	
<b>5</b> Draw the next shape in the sequence. 	
<b>6</b> Which number comes after 103 ?	
<b>7</b> What is $45 - 20$ ?	
<b>8</b> How many Circles are there ? 	
<b>9</b> What number is one half of 88 ?	
<b>10</b> What is $2 \times 9$ ?	

Name \_\_\_\_\_

# Mental Math Worksheets


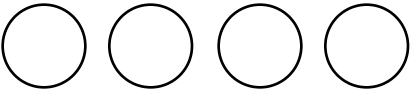
Answer the following

<b>1</b> What is $63 + 64$ ?	
<b>2</b> Write the next number 199, 200, 201, _____	
<b>3</b> Write Five Hundred and Four in numbers	
<b>4</b> Which number is a multiple of 3 ? 3   5   7   2	
<b>5</b> Draw the next shape in the sequence. 	
<b>6</b> Which number comes after 104 ?	
<b>7</b> What is $46 - 30$ ?	
<b>8</b> How many Circles are there ? 	
<b>9</b> What number is one half of 90 ?	
<b>10</b> What is $3 \times 9$ ?	

Name \_\_\_\_\_

# Mental Math Worksheets



Answer the following

<b>1</b> What is $65 + 66$ ?	
<b>2</b> Write the next number 202, 203, 204, _____	
<b>3</b> Write Five Hundred and Five in numbers	
<b>4</b> Which number is a multiple of 3 ? 1   11   2   21	
<b>5</b> Draw the next shape in the sequence. 	
<b>6</b> Which number comes after 105 ?	
<b>7</b> What is $40 - 20$ ?	
<b>8</b> How many Circles are there ? 	
<b>9</b> What number is one half of 92 ?	
<b>10</b> What is $4 \times 9$ ?	

Name \_\_\_\_\_

# Mental Math Worksheets

Answer the following

<b>1</b> What is $67 + 68$ ?	
<b>2</b> Write the next number 205, 206, 207, _____	
<b>3</b> Write Five Hundred and Six in numbers	
<b>4</b> Which number is a multiple of 3 ? 24 41 13 5	
<b>5</b> Draw the next shape in the sequence. 	
<b>6</b> Which number comes after 106 ?	
<b>7</b> What is $47 - 30$ ?	
<b>8</b> How many Circles are there ? 	
<b>9</b> What number is one half of 94 ?	
<b>10</b> What is $5 \times 9$ ?	