
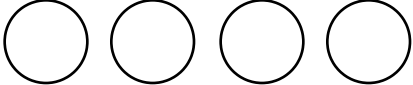


Name /whatistheurl.com

# Mental Math Worksheets

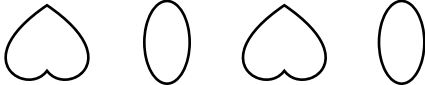

Answer the following

<b>1</b> What is $10 + 11$ ?	
<b>2</b> Write the next number 100, 101, 102, _____	
<b>3</b> Write Two Hundred and One in numbers	
<b>4</b> Which number is a multiple of 2 ? 14 3 5 19	
<b>5</b> Draw the next shape in the sequence. 	
<b>6</b> Which number comes after 72 ?	
<b>7</b> What is $22 - 18$ ?	
<b>8</b> How many Circles are there ? 	
<b>9</b> What number is one half of 22 ?	
<b>10</b> What is $6 \times 6$ ?	

Name \_\_\_\_\_

# Mental Math Worksheets

Answer the following

<b>1</b> What is $11 + 12$ ?	
<b>2</b> Write the next number 103, 104, 105, _____	
<b>3</b> Write Two Hundred and Two in numbers	
<b>4</b> Which number is a multiple of 2 ? 16 3 5 19	
<b>5</b> Draw the next shape in the sequence. 	
<b>6</b> Which number comes after 72 ?	
<b>7</b> What is $23 - 11$ ?	
<b>8</b> How many Circles are there ? 	
<b>9</b> What number is one half of 24 ?	
<b>10</b> What is $7 \times 6$ ?	