
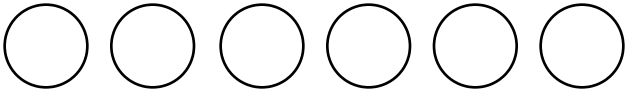


Name <https://whatistheurl.com>

Mental Math Worksheets



Answer the following

1	What is $12 + 13$?	
2	Write the next number 106, 107, 108, ____	
3	Write Two Hundred and Three in numbers	
4	Which number is a multiple of 2? 18 3 15 19	
5	Draw the next shape in the sequence. 	
6	Which number comes after 73?	
7	What is $24 - 12$?	
8	How many Circles are there? 	
9	What number is one half of 26?	
10	What is 8×6 ?	

Name _____

Mental Math Worksheets

Answer the following

1 What is $14 + 15$?	
2 Write the next number 109, 110, 111, _____	
3 Write Two Hundred and Four in numbers	
4 Which number is a multiple of 2 ? 4 23 25 9	
5 Draw the next shape in the sequence. 	
6 Which number comes after 74 ?	
7 What is $25 - 11$?	
8 How many Circles are there ? 	
9 What number is one half of 28 ?	
10 What is 9×6 ?	