



Name _____

Mental Math Worksheets


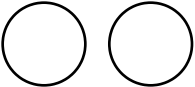
Answer the following

1 What is $16 + 17$?	
2 Write the next number $112, 113, 114, \underline{\hspace{2cm}}$	
3 Write Two Hundred and Five in numbers	
4 Which number is a multiple of 2 ? $3 \ 5 \ 16 \ 19$	
5 Draw the next shape in the sequence. 	
6 Which number comes after 75 ?	
7 What is $26 - 13$?	
8 How many Circles are there ? 	
9 What number is one half of 30 ?	
10 What is 10×6 ?	

Name _____

Mental Math Worksheets



Answer the following

1 What is $17 + 18$?	
2 Write the next number $115, 116, 117, \underline{\hspace{2cm}}$	
3 Write Two Hundred and Six in numbers	
4 Which number is a multiple of 2 ? $28 \quad 3 \quad 25 \quad 29$	
5 Draw the next shape in the sequence. 	
6 Which number comes after 76 ?	
7 What is $27 - 12$?	
8 How many Circles are there ? 	
9 What number is one half of 32 ?	
10 What is 11×6 ?	

Name _____

Mental Math Worksheets


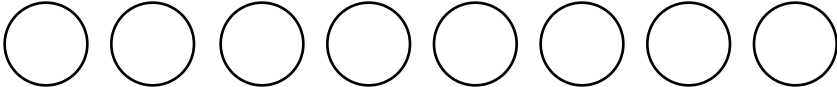
Answer the following

1 What is $19 + 20$?	
2 Write the next number $118, 119, 120, \underline{\quad}$	
3 Write Two Hundred and Seven in numbers	
4 Which number is a multiple of 2 ? $40 \ 23 \ 25 \ 9$	
5 Draw the next shape in the sequence. 	
6 Which number comes after 77 ?	
7 What is $28 - 11$?	
8 How many Circles are there ? 	
9 What number is one half of 34 ?	
10 What is 12×6 ?	

Name _____

Mental Math Worksheets

Answer the following

1 What is $21 + 22$?	
2 Write the next number $121, 122, 123, \underline{\hspace{2cm}}$	
3 Write Two Hundred and Eight in numbers	
4 Which number is a multiple of 2 ? $3 \ 5 \ 16 \ 19$	
5 Draw the next shape in the sequence. 	
6 Which number comes after 78 ?	
7 What is $29 - 13$?	
8 How many Circles are there ? 	
9 What number is one half of 36 ?	
10 What is 1×7 ?	