



Name _____

Mental Math Worksheets



Answer the following

1	What is $41 + 44$?	
2	Write the next number 70, 71, 72, _____	
3	Write Nine Hundred and Two in numbers	
4	Which number is a multiple of 2 ? 9 7 77 22	
5	Draw the next shape in the sequence. 	
6	Which number comes after 88 ?	
7	What is $99 - 39$?	
8	How many Squares are there? 	
9	What number is one half of 72 ?	
10	What is 6×1 ?	

Name _____

Mental Math Worksheets



Answer the following

1	What is $13 + 14$?	
2	Write the next number $73, 74, 75, \underline{\quad}$	
3	Write Nine Hundred and Three in numbers	
4	Which number is a multiple of 3 ? $44 \quad 88 \quad 22 \quad 33$	
5	Draw the next shape in the sequence. 	
6	Which number comes after 13 ?	
7	What is $31 - 19$?	
8	How many Circles are there? 	
9	What number is one half of 22 ?	
10	What is 6×2 ?	

Name _____

Mental Math Worksheets



Answer the following

1	What is $43 + 51$?	
2	Write the next number 76, 77, 78, ____	
3	Write Nine Hundred and Five in numbers	
4	Which number is a multiple of 2 ? 33 77 99 22	
5	Draw the next shape in the sequence. 	
6	Which number comes after 18 ?	
7	What is $54 - 22$?	
8	How many Circles are there ? 	
9	What number is one half of 68 ?	
10	What is 6×3 ?	

Name _____

Mental Math Worksheets

Answer the following

1	What is 11 + 33 ?	
2	Write the next number 79, 80, 81, _____	
3	Write Nine Hundred and Six in numbers	
4	Which number is a multiple of 2 ? 55 9 11 48	
5	Draw the next shape in the sequence. 	
6	Which number comes after 89 ?	
7	What is 99 - 29 ?	
8	How many Squares are there ? 	
9	What number is one half of 74 ?	
10	What is 6 x 4 ?	