



Name _____

Mental Math Worksheets

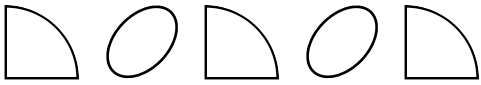
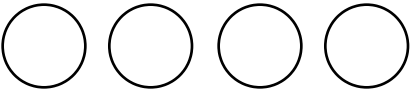
Answer the following

1 What is $23 + 24$?	
2 Write the next number 124, 125, 126, _____	
3 Write Two Hundred and Nine in numbers	
4 Which number is a multiple of 2 ? 5 3 9 6	
5 Draw the next shape in the sequence. 	
6 Which number comes after 79 ?	
7 What is $30 - 12$?	
8 How many Circles are there ? 	
9 What number is one half of 38 ?	
10 What is 2×7 ?	

Name _____

Mental Math Worksheets



Answer the following

1 What is $25 + 26$?	
2 Write the next number 127, 128, 129, _____	
3 Write Two Hundred and Ten in numbers	
4 Which number is a multiple of 2 ? 11 14 15 21	
5 Draw the next shape in the sequence. 	
6 Which number comes after 80 ?	
7 What is $31 - 15$?	
8 How many Circles are there ? 	
9 What number is one half of 40 ?	
10 What is 3×7 ?	

Name _____

Mental Math Worksheets


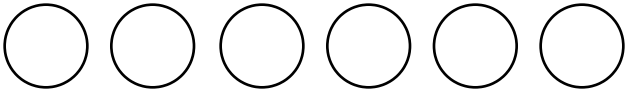
Answer the following

1 What is $27 + 28$?	
2 Write the next number 130, 131, 132, _____	
3 Write Two Hundred and Eleven in numbers	
4 Which number is a multiple of 2 ? 22 11 15 21	
5 Draw the next shape in the sequence. 	
6 Which number comes after 81 ?	
7 What is $32 - 16$?	
8 How many Circles are there ? 	
9 What number is one half of 42 ?	
10 What is 4×7 ?	

Name _____

Mental Math Worksheets

Answer the following

1 What is $29 + 30$?	
2 Write the next number $133, 134, 135, \underline{\quad}$	
3 Write Three Hundred and One in numbers	
4 Which number is a multiple of 2 ? $19 \quad 6 \quad 11 \quad 9$	
5 Draw the next shape in the sequence. 	
6 Which number comes after 82 ?	
7 What is $33 - 17$?	
8 How many Circles are there ? 	
9 What number is one half of 46 ?	
10 What is 5×7 ?	