



Name _____

Mental Math Worksheets



Answer the following

1 What is $31 + 32$?	
2 Write the next number $136, 137, 138, \underline{\quad}$	
3 Write Three Hundred and Two in numbers	
4 Which number is a multiple of 2 ? $3 \quad 15 \quad 18 \quad 19$	
5 Draw the next shape in the sequence. 	
6 Which number comes after 83 ?	
7 What is $34 - 18$?	
8 How many Circles are there ? 	
9 What number is one half of 48 ?	
10 What is 6×7 ?	

Name _____

Mental Math Worksheets



Answer the following

1 What is $33 + 34$?	
2 Write the next number 139, 140, 141, _____	
3 Write Three Hundred and Four in numbers	
4 Which number is a multiple of 2 ? 23 4 25 9	
5 Draw the next shape in the sequence. 	
6 Which number comes after 84 ?	
7 What is $35 - 19$?	
8 How many Circles are there ? 	
9 What number is one half of 50 ?	
10 What is 7×7 ?	

Name _____

Mental Math Worksheets



Answer the following

1 What is $35 + 36$?	
2 Write the next number 142, 143, 144, _____	
3 Write Three Hundred and Five in numbers	
4 Which number is a multiple of 2 ? 3 5 19 16	
5 Draw the next shape in the sequence. 	
6 Which number comes after 85 ?	
7 What is $36 - 23$?	
8 How many Circles are there ? 	
9 What number is one half of 52 ?	
10 What is 8×7 ?	

Name _____

Mental Math Worksheets

Answer the following

1 What is $37 + 38$?	
2 Write the next number 145, 146, 147, _____	
3 Write Three Hundred and Six in numbers	
4 Which number is a multiple of 2 ? 9 7 5 2	
5 Draw the next shape in the sequence. 	
6 Which number comes after 86 ?	
7 What is $37 - 22$?	
8 How many Circles are there ? 	
9 What number is one half of 54 ?	
10 What is 9×7 ?	