



Name \_\_\_\_\_

# Mental Math Worksheets

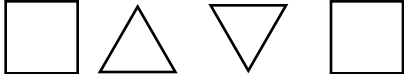

Answer the following

<b>1</b> What is $39 + 40$ ?	
<b>2</b> Write the next number 148, 149, 150, _____	
<b>3</b> Write Three Hundred and Seven in numbers	
<b>4</b> Which number is a multiple of 2 ? 43 42 41 29	
<b>5</b> Draw the next shape in the sequence. 	
<b>6</b> Which number comes after 87 ?	
<b>7</b> What is $38 - 13$ ?	
<b>8</b> How many Circles are there ? 	
<b>9</b> What number is one half of 56 ?	
<b>10</b> What is $10 \times 7$ ?	

Name \_\_\_\_\_

# Mental Math Worksheets


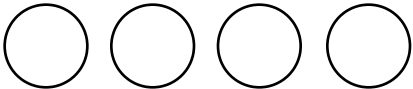
Answer the following

<b>1</b> What is $41 + 42$ ?	
<b>2</b> Write the next number $151, 152, 153, \underline{\quad}$	
<b>3</b> Write Three Hundred and Eight in numbers	
<b>4</b> Which number is a multiple of 2 ? 3 16 19 5	
<b>5</b> Draw the next shape in the sequence. 	
<b>6</b> Which number comes after 88 ?	
<b>7</b> What is $39 - 23$ ?	
<b>8</b> How many Circles are there ? 	
<b>9</b> What number is one half of 58 ?	
<b>10</b> What is $11 \times 7$ ?	

Name \_\_\_\_\_

# Mental Math Worksheets


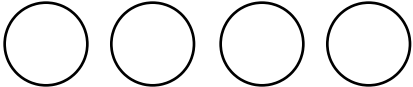
Answer the following

<b>1</b> What is $43 + 44$ ?	
<b>2</b> Write the next number $154, 155, 156, \underline{\hspace{2cm}}$	
<b>3</b> Write Three Hundred and Nine in numbers	
<b>4</b> Which number is a multiple of 2 ? $15 \quad 13 \quad 19 \quad 16$	
<b>5</b> Draw the next shape in the sequence. 	
<b>6</b> Which number comes after 89 ?	
<b>7</b> What is $40 - 12$ ?	
<b>8</b> How many Circles are there ? 	
<b>9</b> What number is one half of 60 ?	
<b>10</b> What is $12 \times 7$ ?	

Name \_\_\_\_\_

# Mental Math Worksheets

Answer the following

<b>1</b> What is $45 + 46$ ?	
<b>2</b> Write the next number $157, 158, 159, \underline{\hspace{2cm}}$	
<b>3</b> Write Three Hundred and Ten in numbers	
<b>4</b> Which number is a multiple of 2 ? $1 \quad 4 \quad 15 \quad 21$	
<b>5</b> Draw the next shape in the sequence. 	
<b>6</b> Which number comes after 90 ?	
<b>7</b> What is $41 - 16$ ?	
<b>8</b> How many Circles are there ? 	
<b>9</b> What number is one half of 62 ?	
<b>10</b> What is $1 \times 8$ ?	