



Name _____

Mental Math Worksheets


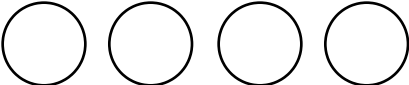
Answer the following

1 What is $47 + 48$?	
2 Write the next number 160, 161, 162, _____	
3 Write Four Hundred and One in numbers	
4 Which number is a multiple of 2 ? 11 40 13 21	
5 Draw the next shape in the sequence. 	
6 Which number comes after 91 ?	
7 What is $42 - 26$?	
8 How many Circles are there ? 	
9 What number is one half of 64 ?	
10 What is 2×8 ?	

Name _____

Mental Math Worksheets


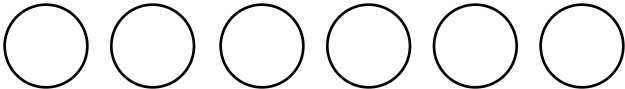
Answer the following

1 What is $49 + 50$?	
2 Write the next number $163, 164, 165, \underline{\hspace{2cm}}$	
3 Write Four Hundred and Two in numbers	
4 Which number is a multiple of 2 ? $19 \quad 16 \quad 11 \quad 19$	
5 Draw the next shape in the sequence. 	
6 Which number comes after 92 ?	
7 What is $34 - 19$?	
8 How many Circles are there ? 	
9 What number is one half of 66 ?	
10 What is 3×8 ?	

Name _____

Mental Math Worksheets


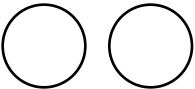
Answer the following

1 What is $51 + 52$?	
2 Write the next number $166, 167, 168, \underline{\quad}$	
3 Write Four Hundred and Three in numbers	
4 Which number is a multiple of 2 ? $31 \quad 5 \quad 8 \quad 9$	
5 Draw the next shape in the sequence. 	
6 Which number comes after 93 ?	
7 What is $35 - 20$?	
8 How many Circles are there ? 	
9 What number is one half of 68 ?	
10 What is 4×8 ?	

Name _____

Mental Math Worksheets

Answer the following

1 What is $53 + 54$?	
2 Write the next number $169, 170, 171, \underline{\hspace{2cm}}$	
3 Write Four Hundred and Four in numbers	
4 Which number is a multiple of 2 ? 9 99 1 22	
5 Draw the next shape in the sequence. 	
6 Which number comes after 94 ?	
7 What is $36 - 22$?	
8 How many Circles are there ? 	
9 What number is one half of 70 ?	
10 What is 5×8 ?	