
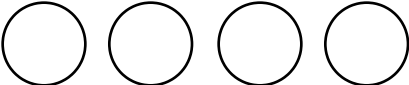


Name _____

Mental Math Worksheets


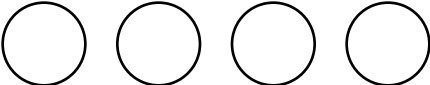
Answer the following

1 What is $75 + 76$?	
2 Write the next number $217, 218, 219, \underline{\hspace{2cm}}$	
3 Write Five Hundred and Ten in numbers	
4 Which number is a multiple of 3 ? $11 \quad 13 \quad 18 \quad 17$	
5 Draw the next shape in the sequence. 	
6 Which number comes after 103 ?	
7 What is $61 - 40$?	
8 How many Circles are there ? 	
9 What number is one half of 102 ?	
10 What is 9×9 ?	

Name _____

Mental Math Worksheets



Answer the following

1 What is $60 + 60$?	
2 Write the next number 208, 209, 210, _____	
3 Write Five Hundred and Seven in numbers	
4 Which number is a multiple of 3 ? 7 8 11 3	
5 Draw the next shape in the sequence. 	
6 Which number comes after 98 ?	
7 What is $48 - 22$?	
8 How many Circles are there ? 	
9 What number is one half of 96 ?	
10 What is 6×9 ?	

Name _____

Mental Math Worksheets

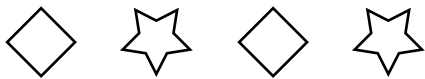
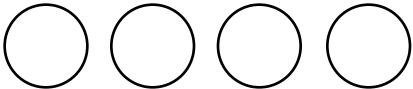
Answer the following

1 What is $71 + 72$?	
2 Write the next number $211, 212, 213, \underline{\quad}$	
3 Write Five Hundred and Eight in numbers	
4 Which number is a multiple of 3? $9 \quad 8 \quad 7 \quad 5$	
5 Draw the next shape in the sequence. 	
6 Which number comes after 99 ?	
7 What is $52 - 20$?	
8 How many Circles are there ? 	
9 What number is one half of 98 ?	
10 What is 7×9 ?	

Name _____

Mental Math Worksheets

Answer the following

1 What is $73 + 74$?	
2 Write the next number $214, 215, 216, \underline{\hspace{2cm}}$	
3 Write Five Hundred and Nine in numbers	
4 Which number is a multiple of 3 ? $1 \quad 3 \quad 5 \quad 8$	
5 Draw the next shape in the sequence. 	
6 Which number comes after 101 ?	
7 What is $60 - 50$?	
8 How many Circles are there ? 	
9 What number is one half of 100 ?	
10 What is 8×9 ?	