



Name \_\_\_\_\_

# Mental Math Worksheets


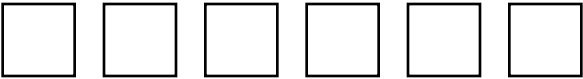
Answer the following

<b>1</b> What is $1 + 9$ ?	
<b>2</b> Write the next number 91, 92, 93, _____	
<b>3</b> Write Two Hundred and Ninety in numbers	
<b>4</b> Which number is a multiple of 2 ? 12 3 5 19	
<b>5</b> Draw the next shape in the sequence. 	
<b>6</b> Which number comes after 71 ?	
<b>7</b> What is $20 - 18$ ?	
<b>8</b> How many Circles are there ? 	
<b>9</b> What number is one half of 20 ?	
<b>10</b> What is $2 \times 7$ ?	

Name \_\_\_\_\_

# Mental Math Worksheets


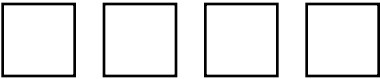
Answer the following

<b>1</b> What is $7 + 3$ ?	
<b>2</b> Write the next number 18, 19, 20, ____	
<b>3</b> Write One Hundred and thirteen in numbers	
<b>4</b> Which number is a multiple of 2 ? 9 19 29 40	
<b>5</b> Draw the next shape in the sequence. 	
<b>6</b> Which number comes after 99 ?	
<b>7</b> What is $15 - 9$ ?	
<b>8</b> How many Squares are there ? 	
<b>9</b> What number is one half of 12 ?	
<b>10</b> What is $3 \times 1$ ?	

Name \_\_\_\_\_

# Mental Math Worksheets



Answer the following

<b>1</b> What is $17 + 14$ ?	
<b>2</b> Write the next number $33, 34, 35, \underline{\hspace{2cm}}$	
<b>3</b> Write Three Hundred and One in numbers	
<b>4</b> Which number is a multiple of 3? $15 \ 2 \ 4 \ 8$	
<b>5</b> Draw the next shape in the sequence. 	
<b>6</b> Which number comes after 89?	
<b>7</b> What is $9 - 8$ ?	
<b>8</b> How many Squares are there? 	
<b>9</b> What number is one half of 4?	
<b>10</b> What is $3 \times 5$ ?	

Name \_\_\_\_\_

# Mental Math Worksheets

Answer the following

<b>1</b> What is $15 + 5$ ?	
<b>2</b> Write the next number 10, 11, 12, ___	
<b>3</b> Write Six Hundred and Nine in numbers	
<b>4</b> Which number is a multiple of 3 ? 9 10 11 13	
<b>5</b> Draw the next shape in the sequence. 	
<b>6</b> Which number comes after 69 ?	
<b>7</b> What is $20 - 10$ ?	
<b>8</b> How many Circles are there ? 	
<b>9</b> What number is one half of 18 ?	
<b>10</b> What is $3 \times 8$ ?	