



Name _____

Mental Math Worksheets

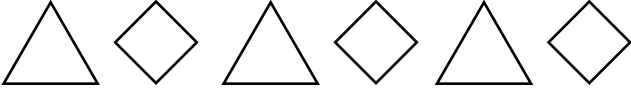

Answer the following

1 What is $24 + 25$?	
2 Write the next number $37, 38, 39, \underline{\quad}$	
3 Write Seven Hundred and Two in numbers	
4 Which number is a multiple of 3 ? $3 \quad 11 \quad 1 \quad 2$	
5 Draw the next shape in the sequence. 	
6 Which number comes after 81 ?	
7 What is $32 - 23$?	
8 How many Circles are there ? 	
9 What number is one half of 88 ?	
10 What is 4×4 ?	

Name _____

Mental Math Worksheets



Answer the following

1 What is $15 + 16$?	
2 Write the next number 2, 3, 4, ____	
3 Write Three Hundred and Two in numbers	
4 Which number is a multiple of 2 ? 20 3 7 9	
5 Draw the next shape in the sequence. 	
6 Which number comes after 84 ?	
7 What is $31 - 27$?	
8 How many Circles are there ? 	
9 What number is one half of 26 ?	
10 What is 4×8 ?	

Name _____

Mental Math Worksheets


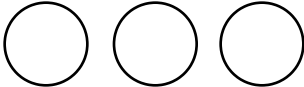
Answer the following

1 What is $16 + 17$?	
2 Write the next number 5, 6, 7, _____	
3 Write Six Hundred and Two in numbers	
4 Which number is a multiple of 2 ? 11 6 27 15	
5 Draw the next shape in the sequence. 	
6 Which number comes after 47 ?	
7 What is $21 - 13$?	
8 How many Squares are there ? 	
9 What number is one half of 52 ?	
10 What is 4×9 ?	

Name _____

Mental Math Worksheets

Answer the following

1 What is $25 + 26$?	
2 Write the next number 40, 41, 42, ____	
3 Write Seven Hundred and Three in numbers	
4 Which number is a multiple of 3 ? 11 15 1 2	
5 Draw the next shape in the sequence. 	
6 Which number comes after 82 ?	
7 What is $33 - 24$?	
8 How many Circles are there ? 	
9 What number is one half of 18 ?	
10 What is 5×1 ?	