



Name _____

Mental Math Worksheets



Answer the following

<p>1 What is $16 + 17$?</p>	
<p>2 Write the next number 5, 6, 7, _____</p>	
<p>3 Write Six Hundred and Two in numbers</p>	
<p>4 Which number is a multiple of 2? 11 6 27 15</p>	
<p>5 Draw the next shape in the sequence.</p> <p></p>	
<p>6 Which number comes after 47?</p>	
<p>7 What is $21 - 13$?</p>	
<p>8 How many Squares are there?</p> <p></p>	
<p>9 What number is one half of 52?</p>	
<p>10 What is 4×9?</p>	

Name _____

Mental Math Worksheets



Answer the following

<p>1 What is $25 + 26$?</p>	
<p>2 Write the next number 40, 41, 42, ____</p>	
<p>3 Write Seven Hundred and Three in numbers</p>	
<p>4 Which number is a multiple of 3? 11 15 1 2</p>	
<p>5 Draw the next shape in the sequence.</p> <p></p>	
<p>6 Which number comes after 82?</p>	
<p>7 What is $33 - 24$?</p>	
<p>8 How many Circles are there ?</p> <p></p>	
<p>9 What number is one half of 18?</p>	
<p>10 What is 5×1?</p>	

Name _____

Mental Math Worksheets



Answer the following

1 What is $27 + 28$?	
2 Write the next number 43, 44, 45, ____	
3 Write Three Hundred and Three in numbers	
4 Which number is a multiple of 2 ? 3 7 9 22	
5 Draw the next shape in the sequence. 	
6 Which number comes after 44 ?	
7 What is $32 - 29$?	
8 How many Circles are there ? 	
9 What number is one half of 30 ?	
10 What is 5×2 ?	

Name _____

Mental Math Worksheets

Answer the following

<p>1 What is $29 + 30$?</p>	
<p>2 Write the next number 46, 47, 48, _____</p>	
<p>3 Write One Hundred and Three in numbers</p>	
<p>4 Which number is a multiple of 2 ? 2 3 5 7</p>	
<p>5 Draw the next shape in the sequence. </p>	
<p>6 Which number comes after 67 ?</p>	
<p>7 What is $22 - 14$?</p>	
<p>8 How many Squares are there ? </p>	
<p>9 What number is one half of 10 ?</p>	
<p>10 What is 5×3 ?</p>	