



Grade 1 Math Addition Worksheet

1. Zach had 3 oranges. Anna gave him 7 more. How many oranges does Zach have now?




2. Molly had 5 pieces of candy. She received 3 more from her friend. How many pieces of candy does Molly have now?



3. John had 6 balloons. His aunt gave him 4 more balloons. How many balloons does John have now?



4. Sandra had 5 apples. Her brother gave her 2 more. How many apples does Sandra have now?



5. John has 10 cookies. His brother gave him 5 more. How many cookies does John have now?




Answer Key


1. Zach had 10 oranges.




2. Molly had 8 candies



3. John has 10 balloons



4. Sandra has 7 apples



5. John has 15 cookies.

