

Draw an array & Multiply

Solve each multiplication and draw a square table boxes

$2 \times 1 = \square$

$2 \times 7 = \square$

$3 \times 7 = \square$

$6 \times 7 = \square$

$5 \times 4 = \square$

$7 \times 1 = \square$

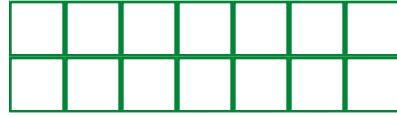
Answer Key

Solve each multiplication and draw a square table boxes


$2 \times 1 = \boxed{2}$




$2 \times 7 = \boxed{14}$




$3 \times 7 = \boxed{21}$



$6 \times 7 = \boxed{42}$



$5 \times 4 = \boxed{20}$



$7 \times 1 = \boxed{7}$



Draw an array & Multiply

Solve each multiplication and draw a square table boxes

$3 \times 7 = \square$

$4 \times 6 = \square$

$2 \times 6 = \square$

$5 \times 7 = \square$


$5 \times 6 = \square$

$4 \times 8 = \square$

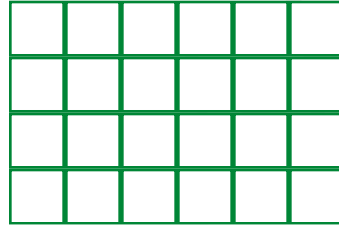
Answer Key

Solve each multiplication and draw a square table boxes

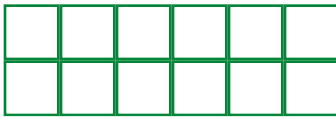
$3 \times 7 = 21$




$4 \times 6 = 24$




$2 \times 6 = 12$




$5 \times 7 = 35$



$5 \times 6 = 30$



$4 \times 8 = 32$



Draw an array & Multiply

Solve each multiplication and draw a square table boxes

$3 \times 1 = \square$

$5 \times 3 = \square$

$8 \times 2 = \square$

$1 \times 2 = \square$

$6 \times 5 = \square$

$7 \times 3 = \square$

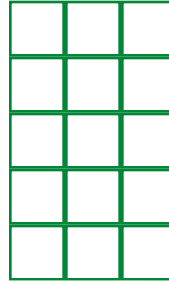
Answer Key

Solve each multiplication and draw a square table boxes


$3 \times 1 = \boxed{3}$



$5 \times 3 = \boxed{15}$




$8 \times 2 = \boxed{16}$




$1 \times 2 = \boxed{2}$



$6 \times 5 = \boxed{30}$



$7 \times 3 = \boxed{21}$



Draw an array & Multiply

Solve each multiplication and draw a square table boxes

$4 \times 5 = \square$

$4 \times 4 = \square$

$7 \times 2 = \square$

$4 \times 5 = \square$


$3 \times 4 = \square$

$6 \times 5 = \square$


Answer Key

Solve each multiplication and draw a square table boxes


$4 \times 5 = 20$




$4 \times 4 = 16$




$7 \times 2 = 14$




$4 \times 5 = 20$



$3 \times 4 = 12$



$6 \times 5 = 30$



Draw an array & Multiply

Solve each multiplication and draw a square table boxes

$4 \times 8 = \square$

$8 \times 4 = \square$

$3 \times 7 = \square$

$5 \times 6 = \square$


$8 \times 5 = \square$

$7 \times 7 = \square$

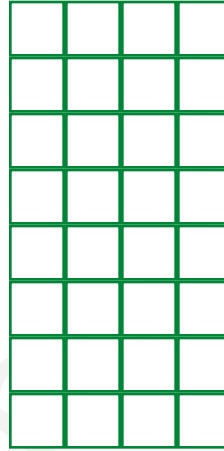
Answer Key

Solve each multiplication and draw a square table boxes


$4 \times 8 = \boxed{32}$




$8 \times 4 = \boxed{32}$




$3 \times 7 = \boxed{21}$



$5 \times 6 = \boxed{30}$



$8 \times 5 = \boxed{40}$



$7 \times 7 = \boxed{49}$

