


Name : .....

Class : .....

# MISSING NUMBERS

Write the missing numbers in the blanks.



1 ▶ 2 ▶  ▶ 4 ▶ 5



9 ◀ 8 ◀ 7 ◀ 6

11 ▶ 12 ▶  ▶ 14 ▶ 15

20 ◀  ◀ 18 ◀ 17 ◀ 

 ▶ 22 ▶ 23 ▶ 24 ▶ 

Name : .....

Class : .....

# MISSING NUMBERS

Write the missing numbers in the blanks.




2 ▶ 3 ▶ 4 ▶ 5



10 ◀ 9 ◀ 7 ◀ 6



11 ▶ 13 ▶ 14 ▶ 15



19 ◀ 17 ◀ 16



21 ▶ 22 ▶ 24 ▶


Name : .....

Class : .....

# MISSING NUMBERS


Write the missing numbers in the blanks.

1 ▶ 2 ▶ 3 ▶  ▶ 5

10 ◀ 9 ◀ 8 ◀ 7 ◀ 

11 ▶ 12 ▶ 13 ▶ 14 ▶ 

20 ◀  ◀ 18 ◀  ◀ 16


 ▶ 22 ▶ 23 ▶ 24 ▶ 


Name : .....


Class : .....



# MISSING NUMBERS

Write the missing numbers in the blanks.

1 ▶  3 ▶ 4 ▶ 5

 9 ◀ 8 ◀ 7 ◀ 6

11 ▶ 12 ▶ 13 ▶ 14 ▶ 

 19 ◀ 18 ◀ 17 ◀ 

 22 ▶ 23 ▶ 24 ▶ 