


Count the Stars



Name : _____

Count the Stars

Count the stars in each group. Write the sum in the box.

 +  =

 +  =

 +  =

 +  =

Name : _____

Count the Stars

Count the stars in each group. Write the sum in the box.

(Answer Key)

$$\begin{array}{c} \star \\ \star \\ \star \end{array} + \star = \boxed{4}$$

$$\star \star + \star \star = \boxed{4}$$

$$\begin{array}{c} \star \star \\ \star \star \end{array} + \begin{array}{c} \star \star \\ \star \end{array} = \boxed{7}$$

$$\begin{array}{c} \star \star \\ \star \end{array} + \star \star = \boxed{5}$$